









# Compare the weight of two objects

## Grade 1 Measurement Worksheet

Circle the object that weighs more.









School bus 	Paper clip 	Book 	Boy 
Computer 	Cup 	Toothbrush 	Toy Train 

Circle the object that weighs less.

Car 	CD 	Mobile Phone 	Clip 
Nail 	Hammer 	Sunglasses 	Books 

# Answers

Circle the object that weighs more.

<p>School bus</p> 	<p>Paper clip</p> 	<p>Book</p> 	<p>Boy</p> 
<p>Computer</p> 	<p>Cup</p> 	<p>Toothbrush</p> 	<p>Toy Train</p> 

Circle the object that weighs less.

<p>Car</p> 	<p>CD</p> 	<p>Mobile Phone</p> 	<p>Clip</p> 
<p>Nail</p> 	<p>Hammer</p> 	<p>Sunglasses</p> 	<p>Books</p> 